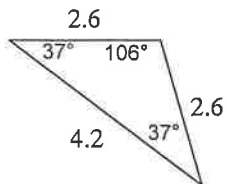


Pre-Algebra

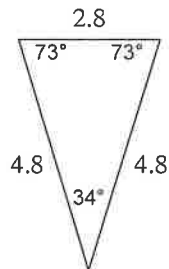
Classify each triangle by its angles and sides.

1)



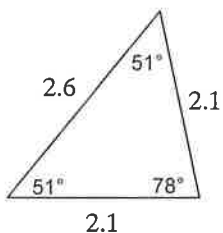
obtuse isosceles

2)



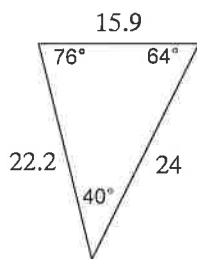
acute isosceles

3)



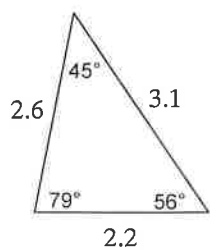
acute isosceles

4)



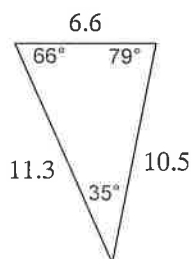
acute scalene

5)



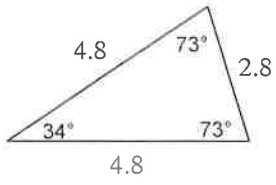
acute scalene

6)



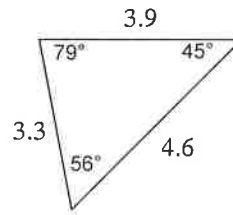
acute scalene

7)



acute isosceles

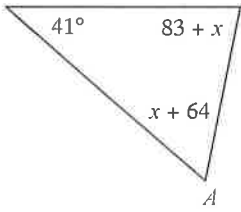
8)



acute scalene

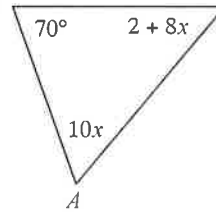
**Find the measure of angle A.**

9)



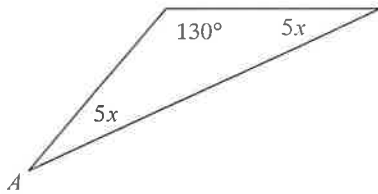
60°

10)



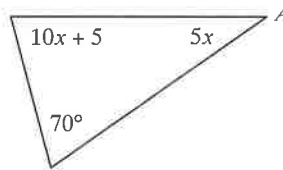
60°

11)



25°

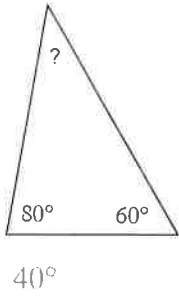
12)



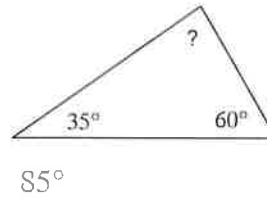
35°

Find the measure of each angle indicated.

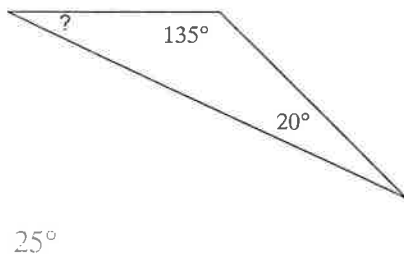
13)



14)



15)



16)

