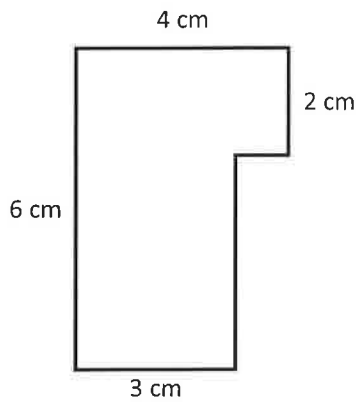
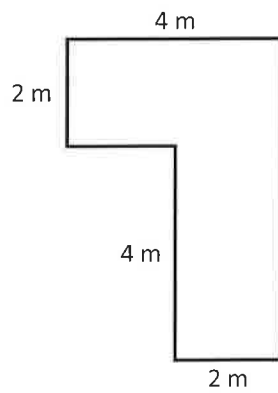


Area and Perimeter of Irregular Shapes

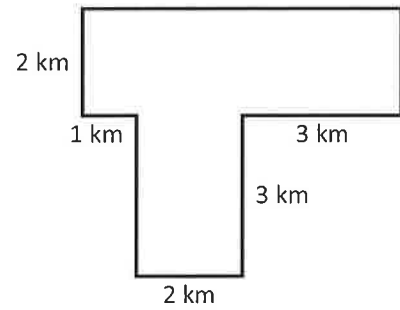
Calculate the area and perimeter of the following shapes.



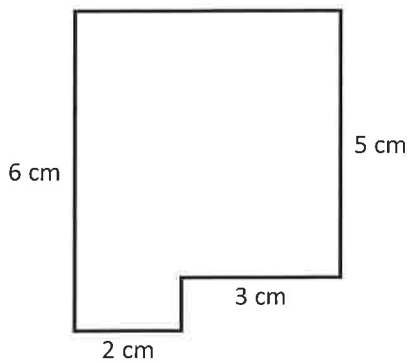
Area= _____ cm^2
Perimeter= _____ cm



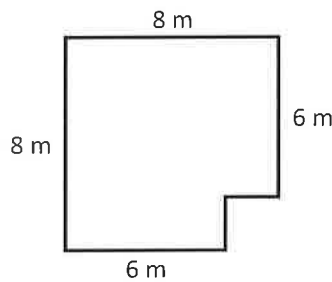
Area= _____ m^2
Perimeter= _____ m



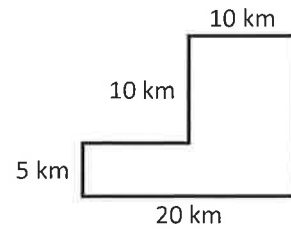
Area= _____ km^2
Perimeter= _____ km



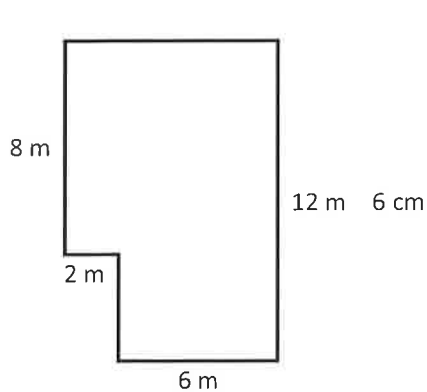
Area= _____ cm^2
Perimeter= _____ cm



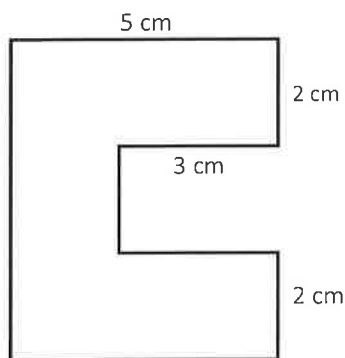
Area= _____ m^2
Perimeter= _____ m



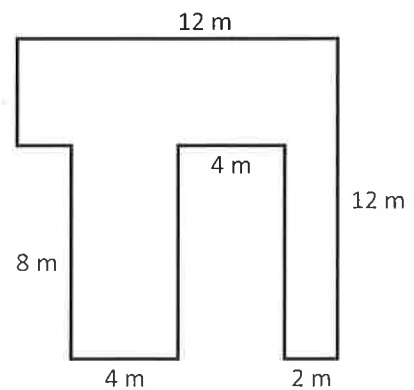
Area= _____ km^2
Perimeter= _____ km



Area= _____ m^2
Perimeter= _____ m



Area= _____ cm^2
Perimeter= _____ cm



Area= _____ m^2
Perimeter= _____ m