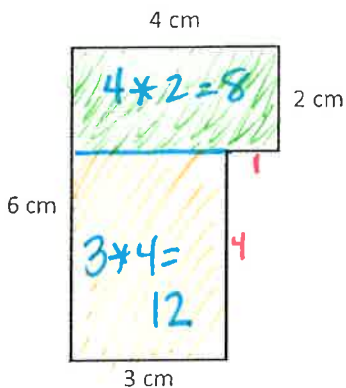
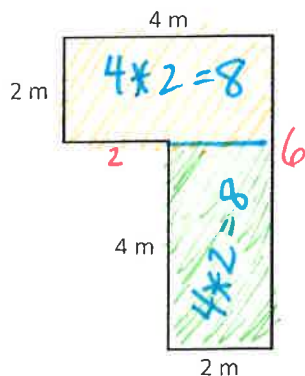


Area and Perimeter of Irregular Shapes

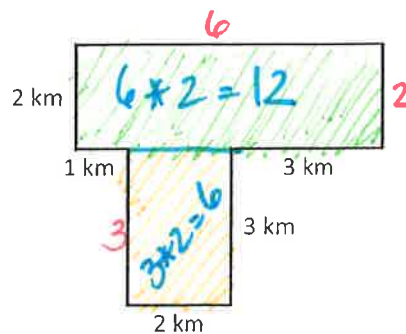
Calculate the area and perimeter of the following shapes.



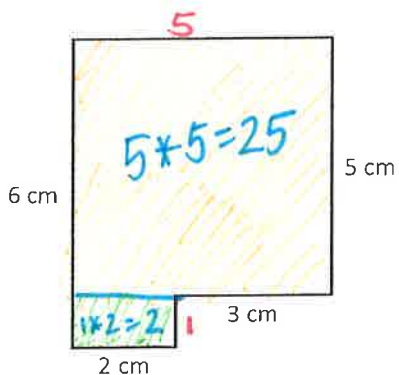
Area = 20 cm²
Perimeter = 20 cm



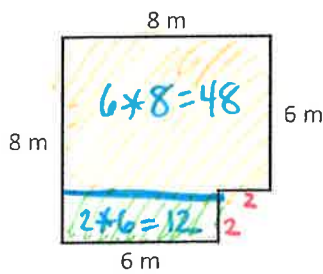
Area = 16 m²
Perimeter = 20 m



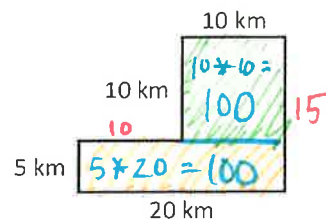
Area = 18 km²
Perimeter = 22 km



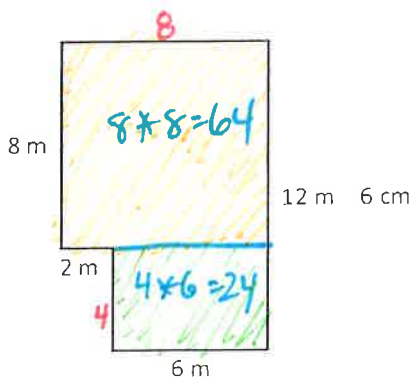
Area = 27 cm²
Perimeter = 22 cm



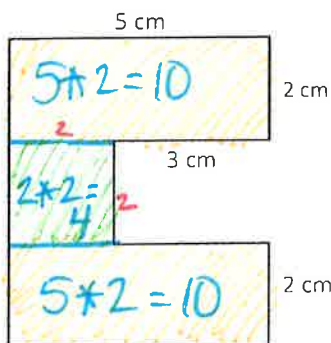
Area = 60 m²
Perimeter = 32 m



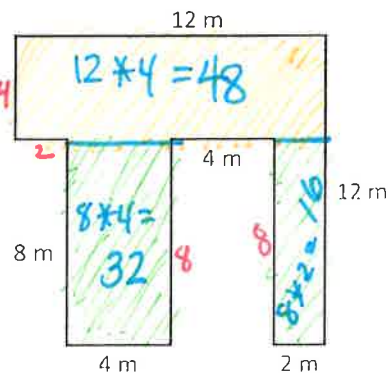
Area = 200 km²
Perimeter = 70 km



Area = 88 m²
Perimeter = 40 m



Area = 24 cm²
Perimeter = 28 cm



Area = 96 m²
Perimeter = 64 m