
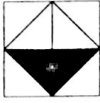




Name _____

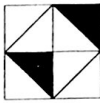
Solving Two Step Equations Practice 1

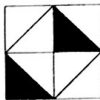
①  $2x + 1 = 23$

②  $4x - 3 = 17$

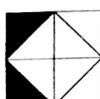
③  $6x + 3 = 15$

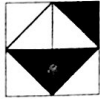
④  $3x + 30 = 0$


⑤  $8x - 8 = -40$

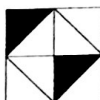
⑥  $-x + 1 = -7$

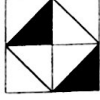
-12	-11	-10	-9	-8
-7	-6	-5	-4	-3
-2	-1	0	1	2
3	4	5	6	7
8	9	10	11	12

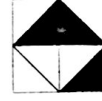
⑦  $-2x + 2 = 4$

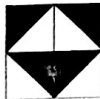
⑫  $-4x + 6 = -30$

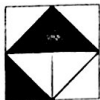
⑰  $3x - 5 = -11$

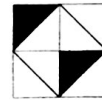
⑧  $2x + 8 = -16$

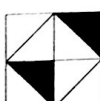
⑬  $8x - 18 = 30$

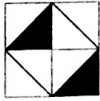
⑱  $-x + 20 = 31$


⑨  $-3x + 40 = 10$


⑭  $-x - 6 = 3$


⑲  $6x + 30 = -6$

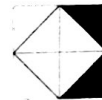
⑩  $-x - 8 = 0$

⑮  $3x - 26 = 10$

⑳  $-x + 1 = 1$

⑪  $-9x - 35 = 10$

⑯  $4x - 8 = 8$

㉑  $-x + 1 = 0$