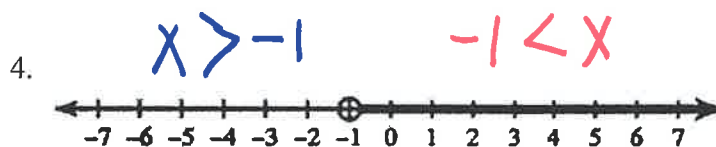
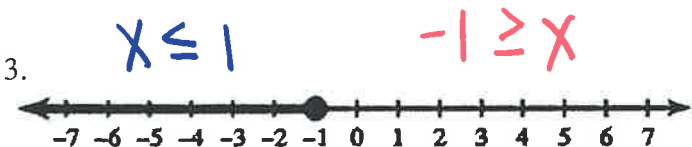
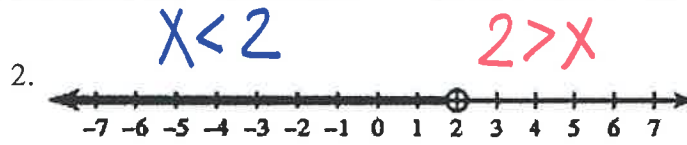
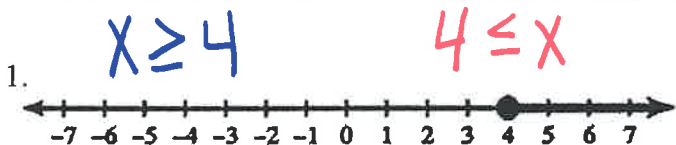


Write an Inequality for each Graph

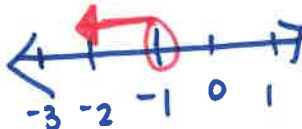


Solving Inequalities with Variables on Both Sides and Graphing

1. $8n - 2 > 19n + 9$

$$\begin{aligned} 8n - 2 + 2 &> 19n + 9 + 2 \\ 8n - 19n &> 19n + 11 - 19n \\ -11n &> 11 \\ \frac{-11n}{-11} &> \frac{11}{-11} \\ n &< -1 \end{aligned}$$


**Switch the sign!*



2. $5d - 8d - 4 \geq -4 + 3d$

$$\begin{aligned} 5d - 8d - 4 &\geq -4 + 3d \\ -3d - 4 - 3d &\geq -4 + 3d - 3d \\ -6d - 4 &\geq -4 + 4 \\ -6d &\geq 0 \\ \frac{-6d}{-6} &\geq \frac{0}{-6} \\ d &\leq 0 \end{aligned}$$


**Switch the sign!*



3. $3p - 5 > 2p + p - 7$

$$\begin{aligned} 3p - 5 - 3p &> 2p + p - 7 - 3p \\ -5 &> -7 \end{aligned}$$

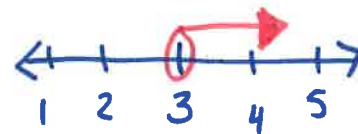
TRUE!
ARN



4. $4 - 2m > 7 - 3m$

$$\begin{aligned} 4 - 2m + 2m &> 7 - 3m + 2m \\ 4 - 7 &> 7 - m - 7 \\ -3 &> -m \\ \frac{-3}{-1} &> \frac{-m}{-1} \\ 3 &< m \end{aligned}$$


**Switch the sign!*



5. $5(4m + 10) < 20m + 2$

$$\begin{aligned} 20m + 50 - 20m &< 20m + 2 - 20m \\ 50 &< 2 \end{aligned}$$

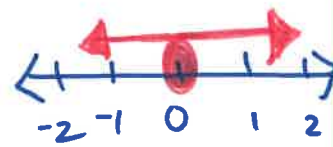
FALSE!
NS



6. $2(4c - 7) \geq 8(c - 3)$

$$\begin{aligned} 8c - 14 - 8c &\geq 8c - 24 - 8c \\ -14 &\geq -24 \end{aligned}$$

TRUE!
ARN



Homework: "Why Was professor Clabberhead Utterbunk..." wkst.