

# What Helps Chicks Get Out of Their Shells?

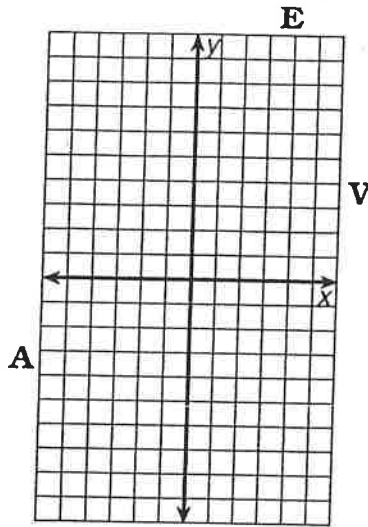
Complete the table of solutions for each equation. Then graph the solutions and draw a line through them. The line, if extended, will cross a letter outside the grid. Write this letter in each box containing the exercise number.

4	3	1	1	6	6	5	2	4
---	---	---	---	---	---	---	---	---

**1**

$$y = 3x - 1$$

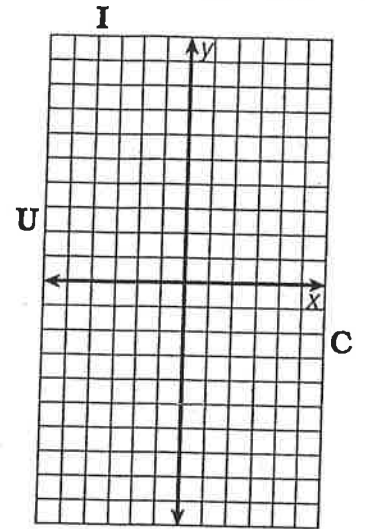
x	y
3	
2	
-2	
0	



**2**

$$y = -2x + 3$$

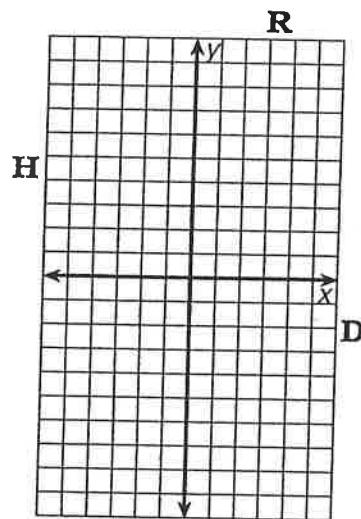
x	y
5	
-3	
2	
0	



**3**

$$y = -x - 2$$

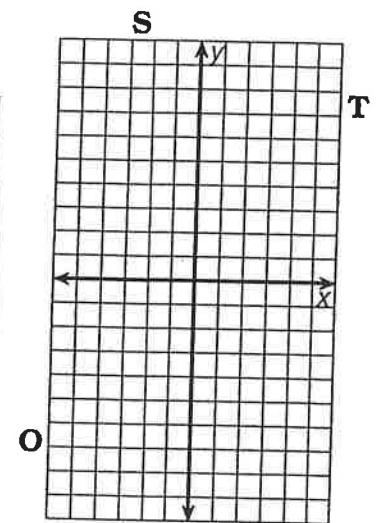
x	y
6	
-5	
-2	
0	



**4**

$$y = \frac{1}{2}x + 4$$

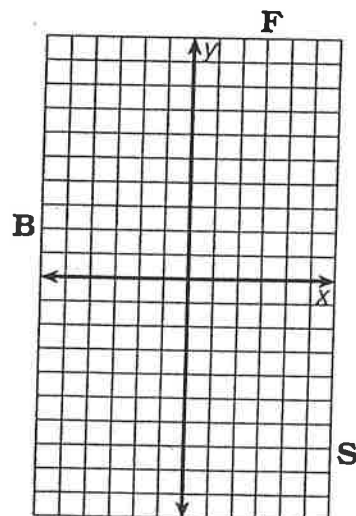
x	y
4	
6	
-2	
0	



**5**

$$y = 7 - 2x$$

x	y
2	
-1	
5	
0	



**6**

$$y = -\frac{2}{3}x + 1$$

x	y
6	
-6	
3	
0	

